






!"#\$%&'() *+(-.#/0(10%&'(!23./40(



" # \$ % & ' ! () * + , ' - ! % . (' / !

$0^* - + \$ 1' !$	$0^* - (") ' !$	$02" 13' !$
-------------------	-------------------	-------------

Mr. Jones has 6 plants in his classroom. How many plants does he have in his classroom?



Farmer Hank has 6 more than 7 horses. He has 4 horses. How many horses does he have?

In the morning, it rained 3 inches. Then in the afternoon, it rained 6 inches. How much did it rain in all?

53. Antonio has 29 cookies. Thirteen of the cookies are chocolate chip. The rest are oatmeal. How many oatmeal cookies are there?

[REDACTED]

[REDACTED]

AA had 7 people in his deck.

[REDACTED]

[REDACTED]

[REDACTED]

[REDACTED]

[REDACTED]

[REDACTED]

[REDACTED]

- 4, %\$(, \$0" %\$&' !() *+, ' - !%. (' /!

' 54" ,!3) * 4 (/!	0* - (")\$/* 1!	0* - +\$1" %\$* 1 /!
--------------------	------------------	----------------------

!

Mr. Thompson sold 6 cartons of cherries at the
ds. 5. / At 1. Saturday. Each carton hol

!
!
!
!

!
!
!
!
!

!
!
!
!
!

!
!
!

!

!

!

!

140. Tammy has 7 trophies. Her mom has twice as many trophies as Tammy.

How many trophies does her mom have?

If a scuba diver could carry 36 coins to the surface in

There are 27 large T-shirts and 15 small T-shirts in a box. Each T-shirt costs \$9.

What is the cost of all the T-shirts in the box?

4. Janice buys 3 bags of 100 pretzels and 2 bags of 10 pretzels

Janice has 29 pretzels after she eats 5 pretzels. How many pretzels did she have before she ate 5 pretzels? Write the number in the box.

A. $19 \times 100 - 5 = 1900 - 5 = 1895$

B. $18 \times 5 = 15 = 74$

C. $18 + 16 + 5 = 29$

D. $18 \times 5 + 16 = 106$